




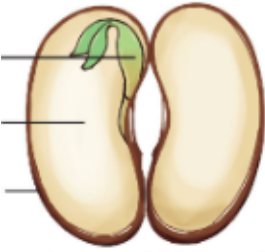


GRADE: V Date:31/7/23	CPE 1 (2023-24) EVS	Marks: 20 Time: 50 minutes
--	--------------------------------------	---

Name:

Class & Section:

Q.No.	Questions	Mark
	Section A	
	Choose the correct answer	
1	The flow of seeds far away from their parents' plants is known as A) Dispersion B) Pollination C) Fertilization D) Reproduction	1
2	The development of seed into seedling which further develop to plant is called A) Conservation B) Seed dispersal C) Germination D) None of these	1
3	Study the following food chain. Grains → Rat → Snake → Mongoose If the number of snakes increases, it could be due to . A) a decrease in the number of rats B) a decrease in the number of mongooses C) a decrease in number of grains D) both a and b	1
4.	When there is no rain, crops fail and there is A) Earthquake B) Flood C) Drought D) Storm	1
	State the following sentences are true or false	
5	Coastal areas might experience floods during cyclones	1
6	Melting of glaciers may cause drought.	1
7	Forest cause global warming.	1
	Match the following:	3

8.		a. Cyclone	
9.		b. Drought	
10.		c. Tsunami	
Fill in the blanks			
11.	The apatanis are a tribal group of people living in the _____ in the district of Arunachal Pradesh.		1
12.	Severe _____ hit South east Asia on 26 th December 2004.		1
13 14 15.	Label the diagram 		3
Section B			
Answer the following			
16	How can earthquake be measured? What is the study of earthquake called?		1
17	Why does a food chain always begin with a producer?		1

18	What are the two parts that come out of the seed known as? In which direction do they grow?	1
19.	What causes flood? Write precaution taken during flood?	2

Prepared by :Ms. Soumya Renjith & Ms. Sangeetha Thomas

Checked by : HOD /HOS: Ms. Jimmy Joseph